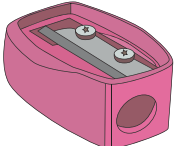






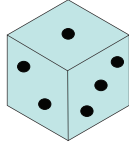

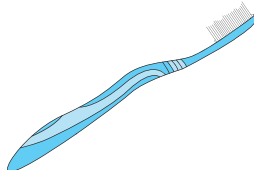

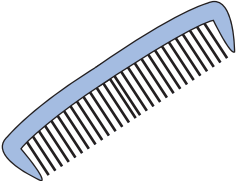



Making Change

Count the coins and write the change for each purchase.

1)	 <p>6¢</p>		_____ ¢		
2)	 <p>7¢</p>		_____ ¢		
3)	 <p>7¢</p>	<div style="border: 2px solid blue; padding: 10px; text-align: center;"> <h2 style="color: blue; margin: 0;">PREVIEW</h2> <p style="color: blue; font-weight: bold; margin: 5px 0;">Gain complete access to the largest collection of worksheets in all subjects!</p> <div style="display: flex; justify-content: space-around; margin: 10px 0;"> <div style="background-color: blue; color: white; padding: 5px; transform: rotate(-2deg);"> <p>Members, please log in to download this worksheet.</p> </div> <div style="background-color: blue; color: white; padding: 5px; transform: rotate(2deg);"> <p>Not a member? Please sign up to gain complete access.</p> </div> </div> <p style="color: blue; font-weight: bold; margin: 10px 0;">www.mathworksheets4kids.com</p> </div>			
4)	 <p>7¢</p>				_____ ¢
5)	 <p>7¢</p>				_____ ¢
6)	 <p>64¢</p>				_____ ¢
7)	 <p>31¢</p>				_____ ¢