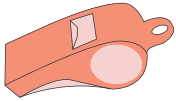



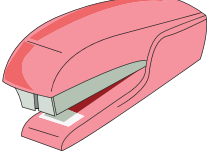







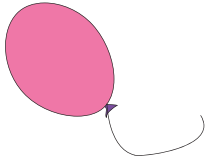



# Making Change

Count the coins and write the change for each purchase.

1)	 <p>11¢</p>		<p>_____ ¢</p>
2)	 <p>17¢</p>		<p>_____ ¢</p>
3)			<p>_____ ¢</p>
4)			<p>_____ ¢</p>
5)			<p>_____ ¢</p>
6)	 <p>35¢</p>		<p>_____ ¢</p>
7)	 <p>17¢</p>		<p>_____ ¢</p>

**PREVIEW**

Gain complete access to the largest collection of worksheets in all subjects!

Members, please log in to download this worksheet.

Not a member? Please sign up to gain complete access.

[www.mathworksheets4kids.com](http://www.mathworksheets4kids.com)