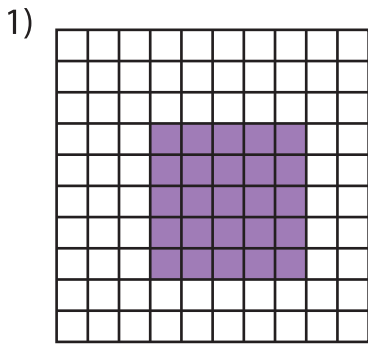


Name : \_\_\_\_\_

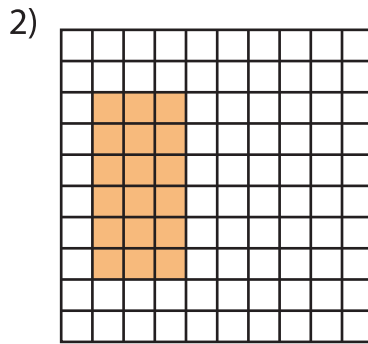
## Multiplication Sentence - Area

Mixed: S1

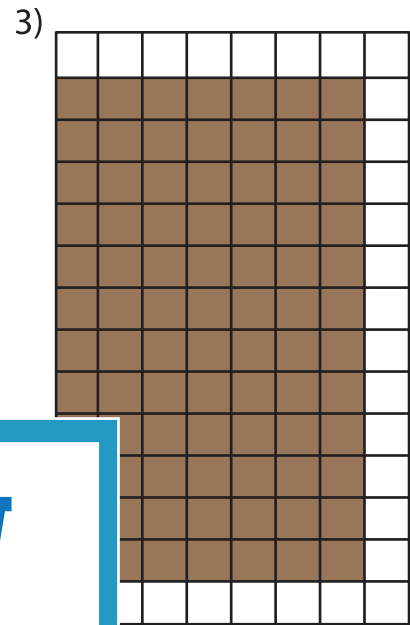
A) Write a multiplication sentence for each model.



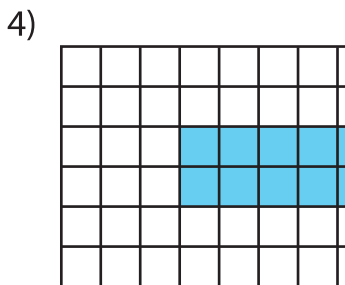
\_\_\_ × \_\_\_ = \_\_\_



\_\_\_ × \_\_\_ = \_\_\_




\_\_\_ × \_\_\_ = \_\_\_



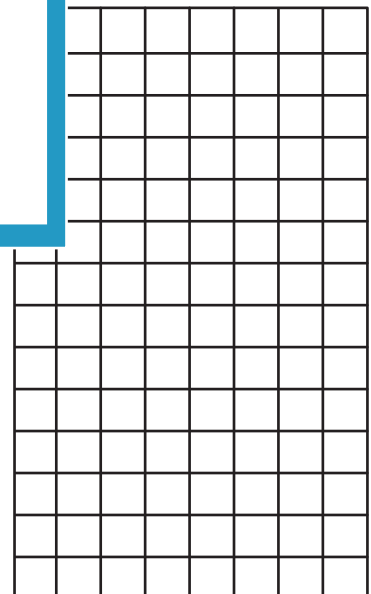
\_\_\_ × \_\_\_ = \_\_\_

B) Draw an area model for each multiplication sentence.


1)  $7 \times 6 =$  \_\_\_\_\_



2)  $4 \times 5 =$  \_\_\_\_\_



4)  $3 \times 10 =$  \_\_\_\_\_



**PREVIEW**

Gain complete access to the largest collection of worksheets in all subjects!

Members, please log in to download this worksheet.

Not a member? Please sign up to gain complete access.

[www.mathworksheets4kids.com](http://www.mathworksheets4kids.com)