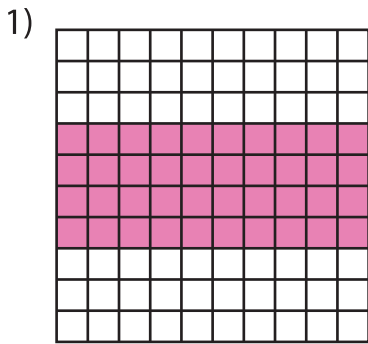


Name : _____

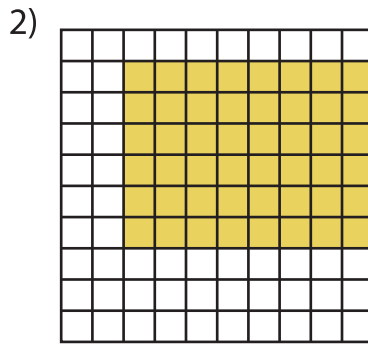
Multiplication Sentence - Area

Mixed: S3

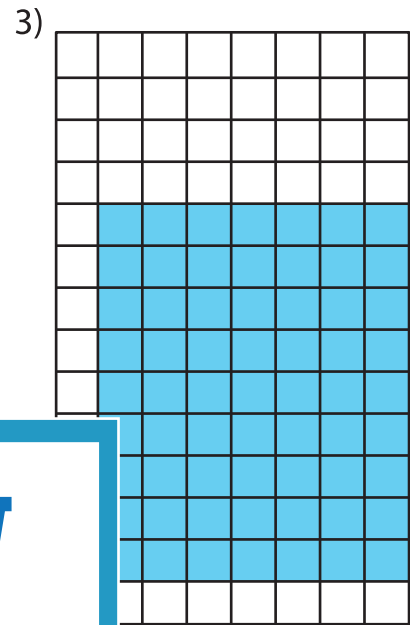
A) Write a multiplication sentence for each model.



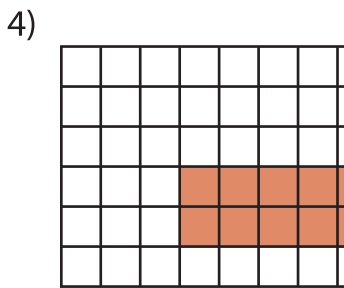
___ × ___ = ___



___ × ___ = ___




___ × ___ = ___



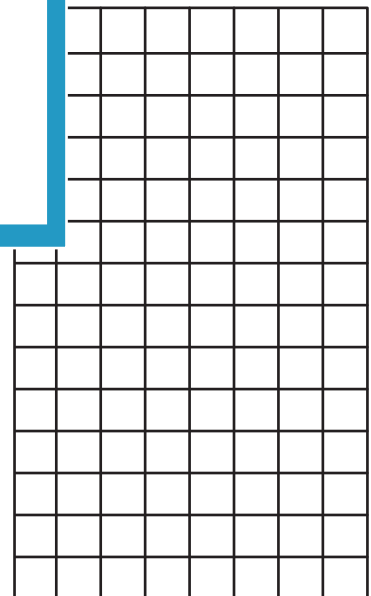
___ × ___ = ___

B) Draw an area model for each multiplication sentence.


1) $5 \times 4 =$ _____



___ × 8 = _____



4) $4 \times 11 =$ _____



PREVIEW

Gain complete access to the largest collection of worksheets in all subjects!

Members, please log in to download this worksheet.

Not a member? Please sign up to gain complete access.

www.mathworksheets4kids.com