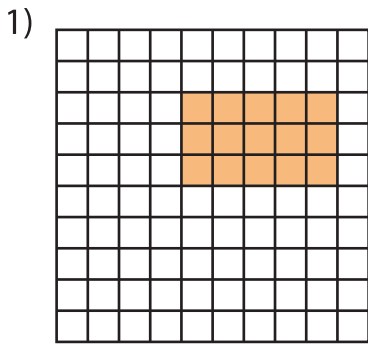


Name : _____

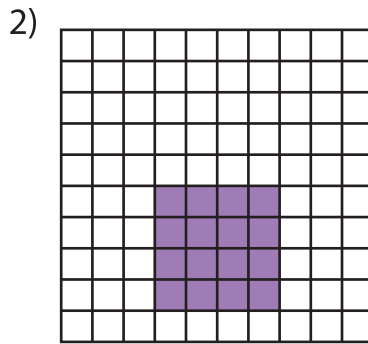
Multiplication Sentence - Area

Mixed: S5

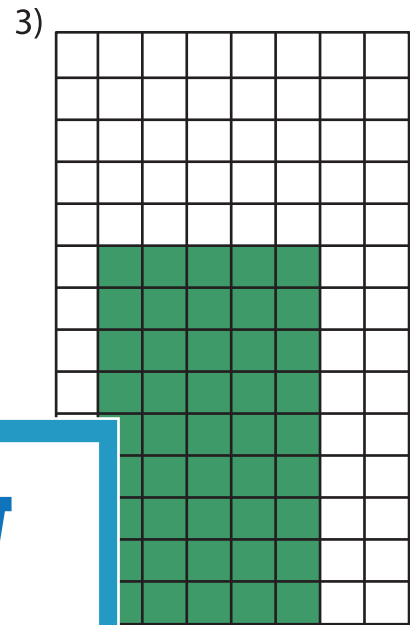
A) Write a multiplication sentence for each model.



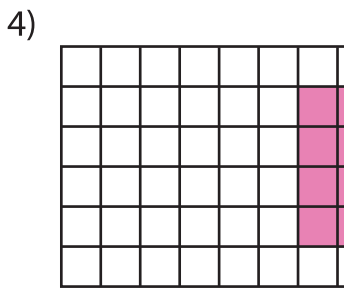
___ × ___ = ___



___ × ___ = ___



___ × ___ = ___



___ × ___ = ___

PREVIEW

Gain complete access to the largest collection of worksheets in all subjects!


Members, please log in to download this worksheet.

Not a member? Please sign up to gain complete access.

www.mathworksheets4kids.com

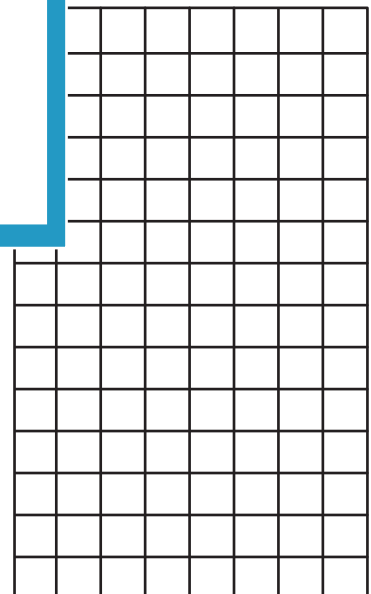
B) Draw an area model for the multiplication sentence.

1) $7 \times 7 =$ _____



_____ × 6 = _____

_____ × 6 = _____



4) $2 \times 9 =$ _____

