


## Describing Model: Equal Groups

Answer the questions that describe each model.

A)



1) How many baskets are there?

\_\_\_\_\_ baskets

2) How many strawberries are there in each basket?

\_\_\_\_\_


3) Write a multiplication sentence to describe the model.

\_\_\_\_\_ × \_\_\_\_\_ = \_\_\_\_\_

4) How many strawberries are there in all?

\_\_\_\_\_

B)



1) How many spaceships are there?

\_\_\_\_\_

2) How many aliens are there in each spaceship?

\_\_\_\_\_ aliens

3) Write a multiplication sentence to describe the model.

\_\_\_\_\_ × \_\_\_\_\_ = \_\_\_\_\_

4) How many aliens are there in all?

\_\_\_\_\_ aliens

# PREVIEW

Gain complete access to the largest collection of worksheets in all subjects!

Members, please log in to download this worksheet.


Not a member? Please sign up to gain complete access.

[www.mathworksheets4kids.com](http://www.mathworksheets4kids.com)

## Describing Model: Equal Groups

Answer the questions that describe each model.

A)



1) How many baskets are there?

  2   baskets

2) How many strawberries are there in all?

  4  


3) Write a multiplication sentence to describe the model.

  2   ×   4  

4) How many strawberries are there in all?

  8  

B)



1) How many spaceships are there?

  3  

2) How many aliens are there in each spaceship?

  3   aliens

3) Write a multiplication sentence to describe the model.

  3   ×   3   =   9  

4) How many aliens are there in all?

  9   aliens

# PREVIEW

Gain complete access to the largest  
collection of worksheets in all subjects!

Members, please  
log in to  
download this  
worksheet.

Not a member?  
Please sign up to  
gain complete  
access.

[www.mathworksheets4kids.com](http://www.mathworksheets4kids.com)