

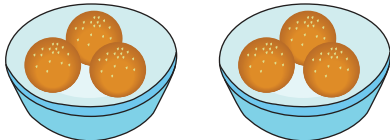
Name : _____

Equal Groups: Multiplication Sentence

Complete-L1S1

Complete the multiplication equation that describes each model.

1)




$$\square \times 3 = 6$$

2)




4

3)



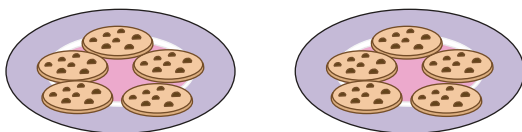
\square

4)



$$2 \times \square = 4$$

5)



$$\square \times 5 = 10$$

PREVIEW

Gain complete access to the largest collection of worksheets in all subjects!

Members, please log in to download this worksheet.

Not a member? Please sign up to gain complete access.

www.mathworksheets4kids.com