


Equal Groups: Multiplication Sentence


Complete the multiplication equation that describes each model.

1)



$$5 \times \square = 25$$

2)



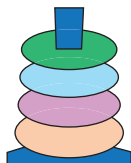
PREVIEW
Gain complete access to the largest collection of worksheets in all subjects!

Members, please log in to download this worksheet.

Not a member? Please sign up to gain complete access.

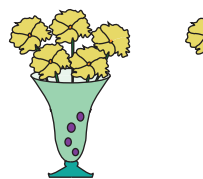
www.mathworksheets4kids.com

3)



2

4)



$$\square \times 5 = 15$$

5)



$$4 \times \square = 16$$