

Equal Groups: Multiplication Sentence


Complete the multiplication equation that describes each model.

1)



$$\square \times 3 = 9$$

2)



2 :


PREVIEW
Gain complete access to the largest
collection of worksheets in all subjects!

Members, please
log in to
download this
worksheet.

Not a member?
Please sign up to
gain complete
access.


www.mathworksheets4kids.com

3)




$$\square$$

4)



$$5 \times \square = 10$$

5)



$$\square \times 2 = 8$$