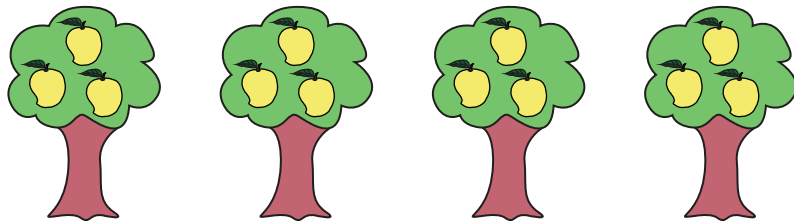


Equal Groups: Multiplication Sentence

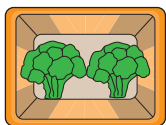
Complete the multiplication equation that describes each model.

1)




4 ×

2)




3)



5 ×

4)



× 3 = 6

5)



5 × = 20

PREVIEW

Gain complete access to the largest collection of worksheets in all subjects!

Members, please log in to download this worksheet.

Not a member? Please sign up to gain complete access.

www.mathworksheets4kids.com