

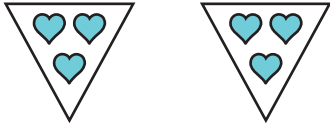
Name : _____

Equal Groups: Multiplication Sentence

Identify-L1S5

A) Identify the multiplication sentence that describes each model.

1)



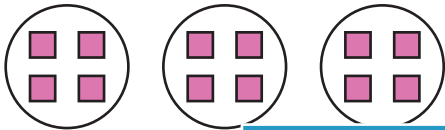
a) 3×3

b) 2×3

c) 3×1

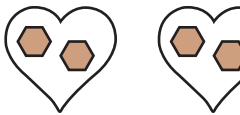
d) 2×2

2)




a) 2×4

3)



a) 4×2

4)



a) 3×4


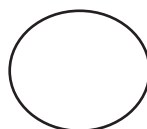

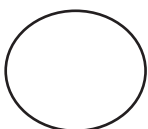
B) Draw equal groups

and write the multiplication sentence.

1) $2 \times 5 =$ _____



2) $4 \times 4 =$ _____



PREVIEW

Gain complete access to the largest collection of worksheets in all subjects!

Members, please log in to download this worksheet.

Not a member? Please sign up to gain complete access.

www.mathworksheets4kids.com