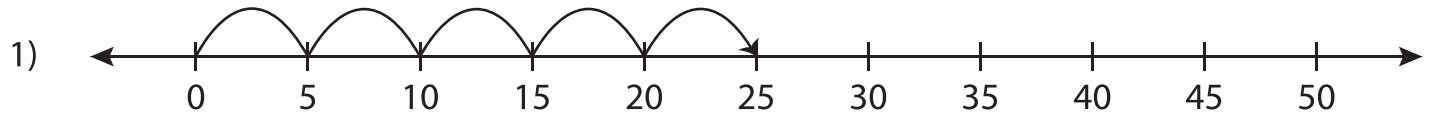


# Number Line Multiplication - MCQ

Sheet 1

Identify the correct multiplication sentence for each number line.



a)  $6 \times 5 = 30$

b)  $2 \times 5 = 10$

c)  $5 \times 5 = 25$

d)  $8 \times 5 = 40$



a)  $8 \times 3 = 24$

d)  $6 \times 6 = 36$



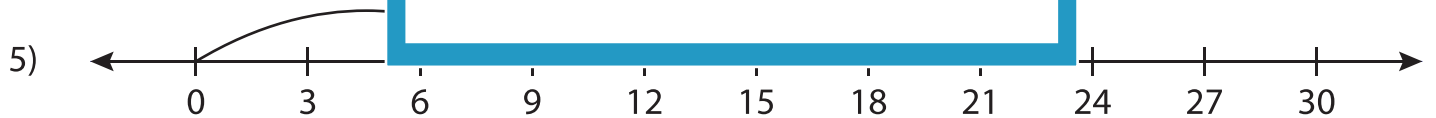
a)  $3 \times 3 = 9$

d)  $1 \times 9 = 9$



a)  $9 \times 2 = 18$

d)  $14 \times 2 = 28$

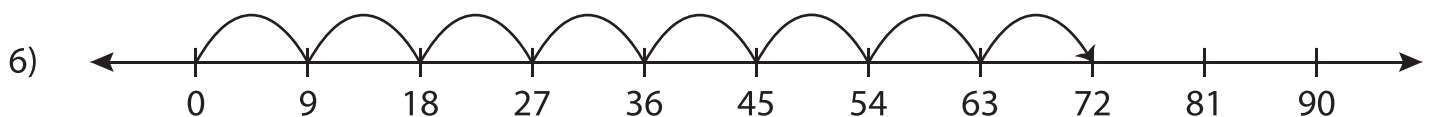


a)  $3 \times 6 = 18$

b)  $3 \times 9 = 27$

c)  $8 \times 2 = 16$

d)  $2 \times 9 = 18$



a)  $6 \times 12 = 72$

b)  $3 \times 9 = 27$

c)  $8 \times 9 = 72$

d)  $9 \times 7 = 63$

**PREVIEW**

Gain complete access to the largest  
collection of worksheets in all subjects!

Members, please  
log in to  
download this  
worksheet.

Not a member?  
Please sign up to  
gain complete  
access.

[www.mathworksheets4kids.com](http://www.mathworksheets4kids.com)