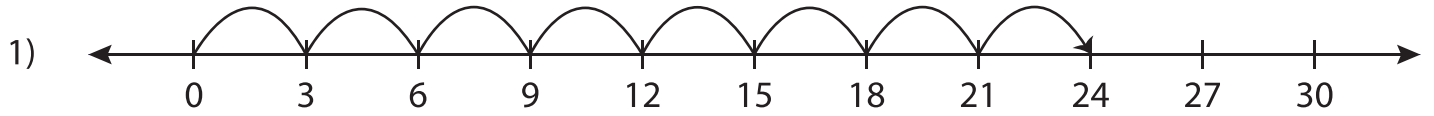


Number Line Multiplication - MCQ

Sheet 3

Identify the correct multiplication sentence for each number line.



a) $6 \times 4 = 24$

b) $8 \times 3 = 24$

c) $4 \times 3 = 12$

d) $6 \times 5 = 30$



a) $6 \times 3 = 18$

d) $6 \times 6 = 36$



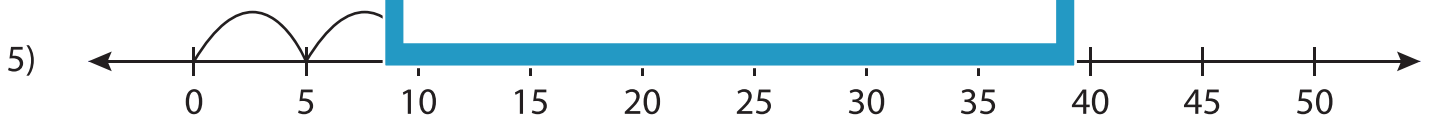
a) $10 \times 5 = 50$

d) $7 \times 9 = 63$



a) $2 \times 4 = 8$

d) $4 \times 1 = 4$

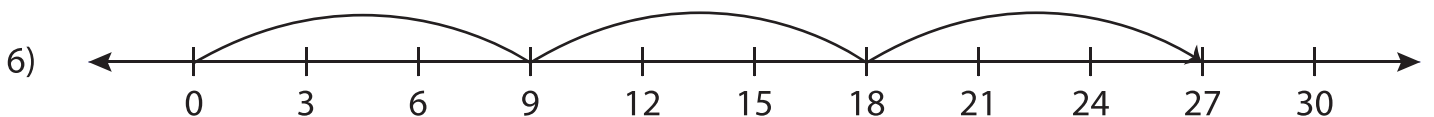


a) $2 \times 10 = 20$

b) $4 \times 5 = 20$

c) $20 \times 1 = 20$

d) $2 \times 15 = 30$



a) $3 \times 9 = 27$

b) $3 \times 3 = 9$

c) $3 \times 7 = 21$

d) $9 \times 9 = 81$

PREVIEW

Gain complete access to the largest collection of worksheets in all subjects!

Members, please log in to download this worksheet.

Not a member? Please sign up to gain complete access.

www.mathworksheets4kids.com