


Name : \_\_\_\_\_

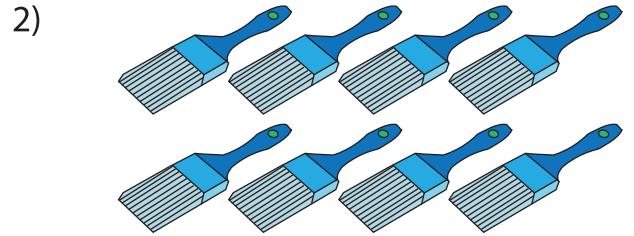
## Multiplication Sentence: Arrays

L153

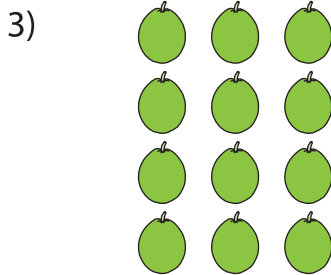
Write a multiplication sentence that describes each array.



\_\_\_\_\_ × \_\_\_\_\_



\_\_\_\_\_ = \_\_\_\_\_



\_\_\_\_\_ × \_\_\_\_\_


# PREVIEW

Gain complete access to the largest collection of worksheets in all subjects!


Members, please log in to download this worksheet.

Not a member? Please sign up to gain complete access.

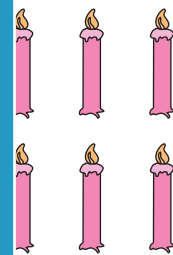
[www.mathworksheets4kids.com](http://www.mathworksheets4kids.com)



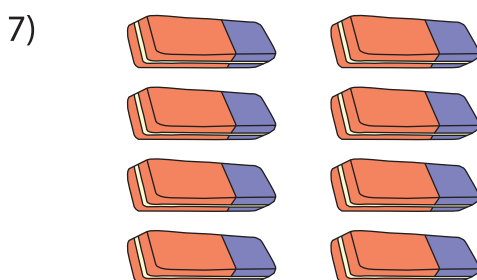
\_\_\_\_\_ = \_\_\_\_\_




\_\_\_\_\_ × \_\_\_\_\_ = \_\_\_\_\_



\_\_\_\_\_ × \_\_\_\_\_ = \_\_\_\_\_



\_\_\_\_\_ × \_\_\_\_\_ = \_\_\_\_\_



\_\_\_\_\_ × \_\_\_\_\_ = \_\_\_\_\_