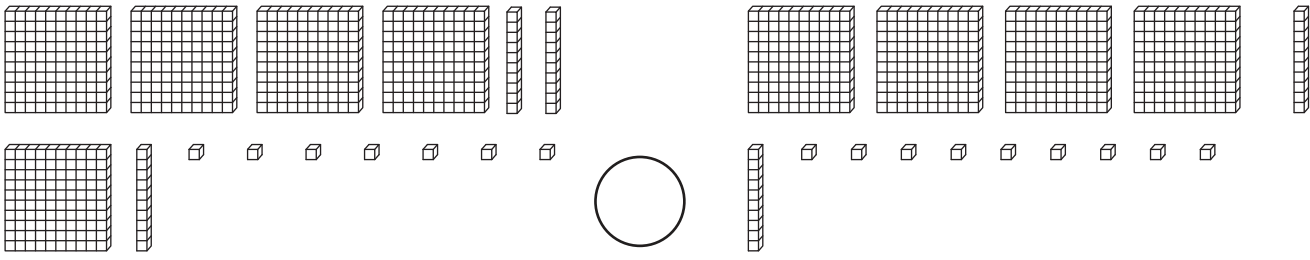


Name : \_\_\_\_\_

# Comparing 3-Digit Numbers - Base Ten Blocks

Count the base-ten blocks in each set, and compare using  $<$ ,  $>$ , or  $=$ .


1)  ○

\_\_\_\_\_

\_\_\_\_\_

2)  \_\_\_\_\_

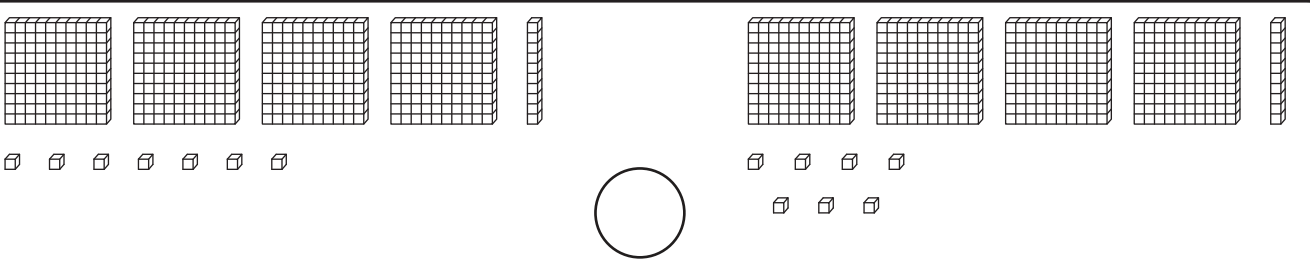
\_\_\_\_\_

3)  \_\_\_\_\_

\_\_\_\_\_

4)  \_\_\_\_\_

\_\_\_\_\_

5)  ○

\_\_\_\_\_

\_\_\_\_\_

**PREVIEW**

Gain complete access to the largest collection of worksheets in all subjects!

Members, please log in to download this worksheet.

Not a member? Please sign up to gain complete access.

[www.mathworksheets4kids.com](http://www.mathworksheets4kids.com)