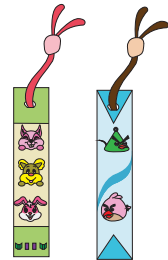


Name : \_\_\_\_\_

## 2-Digit Subtraction


Regrouping: S2

- 1) There is a total of 46 bookmarks in a shop. It manages to sell 37 of them by the end of the month. How many bookmarks remain unsold?



\_\_\_\_\_

- 2) A store puts up 87 robots for sale on July 4th. If it manages to sell 69 robots by end of the week. how many remain unsold?



\_\_\_\_\_

- 3) Brendon owns a \_\_\_\_\_  
rented out?

Gain complete access to the largest  
collection of worksheets in all subjects!

Members, please  
log in to  
download this  
worksheet.

Not a member?  
Please sign up to  
gain complete  
access.

[www.mathworksheets4kids.com](http://www.mathworksheets4kids.com)

\_\_\_\_\_ many are not



\_\_\_\_\_


- 4) Simon bought 5 \_\_\_\_\_  
them for the Xmas

\_\_\_\_\_ tmas. He used 19 of  
ed?



\_\_\_\_\_

- 5) Fiona has to decorate 23 eggs for Easter. If she paints 15 eggs, how many eggs are left over unpainted?



\_\_\_\_\_