


Name : _____

Telling Time


5 minutes: S1

A) Read each clock, and write the time.


1)



2)




3)



4)



5)




6)




B) Choose the clock that shows the given time.

Time : 12:35


A)




B)



C)



C) Choose the correct time shown by the clock.



A)

4:50

B)

10:20

C)

3:50


Name : _____

Telling Time

5 minutes: S1


A) Read each clock, and write the time.

1)




9:20

2)



5:05

3)




11:40

4)




2:25

5)



1:55

6)




8:30


B) Choose the clock that shows the given time.

Time : 12:35

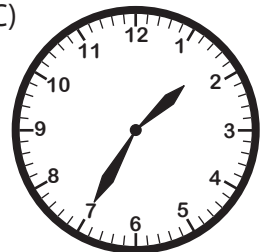
A)




B) ✓



C)



C) Choose the correct time shown by the clock.



A)

4:50

B)

10:20

C) ✓

3:50