

Name : _____

Telling Time


5 minutes: S2

A) Read each clock, and write the time.

1)





2)



3)



4)

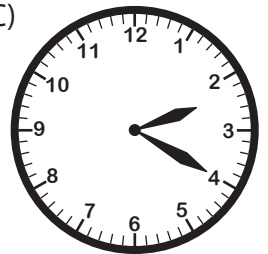


B) Choose the clock


Time : 2:20



C)



C) Choose the correct time shown by the clock.



A)

11:25

B)

11:15

C)

5:55

PREVIEW

Gain complete access to the largest collection of worksheets in all subjects!

Members, please log in to download this worksheet.

Not a member? Please sign up to gain complete access.

www.mathworksheets4kids.com

Name : _____

Telling Time

5 minutes: S2

A) Read each clock, and write the time.

1)




8:35

2)




10:40

3)




6:50

4)




9:10



7:05

B) Choose the clock

Time : 2:20



PREVIEW


Gain complete access to the largest collection of worksheets in all subjects!

Members, please log in to download this worksheet.

Not a member? Please sign up to gain complete access.

www.mathworksheets4kids.com

C) Choose the correct time shown by the clock.



A) ✓

11:25

B)

11:15

C)

5:55