

Drawing Hands - 5 Minutes

Draw hands on each clock for the time given below:

1)



Time: 2:30

2)



6:35

3)



4)




Time: 3:15

Gain complete access to the largest collection of worksheets in all subjects!

Members, please log in to download this worksheet.


Not a member? Please sign up to gain complete access.

www.mathworksheets4kids.com



1:55

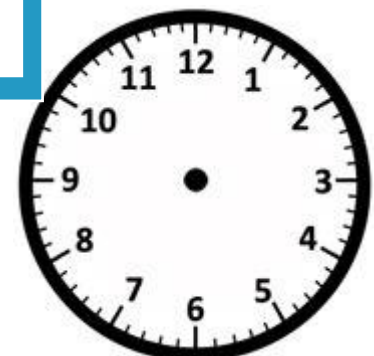
7)



Time: 8:50



Time: 12:55



Time: 5:15