

Name: _____

Drawing Hands - Quarters

Sheet 1

Draw hands on each clock for the time given below:

1)




Time: 12:45

2)



1:15

3)



4)




Time: 3:30

Gain complete access to the largest collection of worksheets in all subjects!


Members, please log in to download this worksheet.

Not a member? Please sign up to gain complete access.



4:15


7)



Time: 11:15



Time: 2:15



Time: 8:30

www.mathworksheets4kids.com