

Name: \_\_\_\_\_

**Drawing Hands - Quarters**

Sheet 2

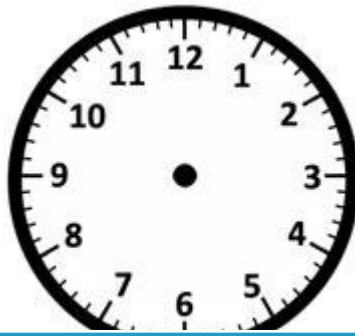
Draw hands on each clock for the time given below:

1)




Time: 10:15

2)



5:45

3)



4)




Time: 11:45

Gain complete access to the largest collection of worksheets in all subjects!

Members, please log in to download this worksheet.


Not a member? Please sign up to gain complete access.

[www.mathworksheets4kids.com](http://www.mathworksheets4kids.com)



1:00


7)



Time: 6:30



Time: 8:15



Time: 3:15