


Name : _____

Telling Time


Quarterly: S1

A) Read each clock, and write the time.


1)




2)



3)



4)

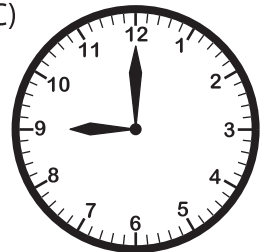


B) Choose the clock


Time : 12:45

www.mathworksheets4kids.com

C)



C) Choose the correct time shown by the clock.



A)

7:15

B)

3:30

C)

6:15