


Name : _____

Telling Time

Quarterly: S2

A) Read each clock, and write the time.

1)




2)



3)



4)




B) Choose the clock

Time : 9:45

www.mathworksheets4kids.com

C)



C) Choose the correct time shown by the clock.



A)

10:15

B)

11:15

C)

3:50