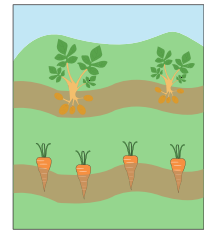


Name : _____


Subtraction

3-digit & 2-digit: S1

- 1) A farmer planted potatoes in 132 rows and carrots in 15 rows. How many more rows of potatoes have been planted than carrots?




- 2) Rhea has 324 postage stamps in her stamp collection while Rhone collected 88 of them. How many more stamps does Rhea have than Rhone?



- 3) West Point Primary School has 120 students. Nine students are dropped off by the bus. How many students use the bus to go to school?

Gain complete access to the largest collection of worksheets in all subjects!

How many students



- 4) A balloon seller had 100 balloons. He sold 35 balloons. How many balloons did he have left?

Members, please log in to download this worksheet.

Not a member? Please sign up to gain complete access.

www.mathworksheets4kids.com

em. How many



- 5) A public park has 121 park benches. On Sunday evening, 57 benches were occupied by the visitors. How many benches were unoccupied?