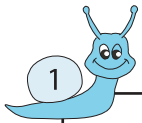


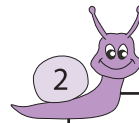
Subtraction

Sheet 2



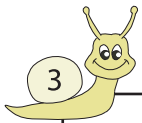
Circle the 2 numbers whose difference is 532

67 599 861 243



Circle the 2 numbers whose difference is 865

71 89 74 939



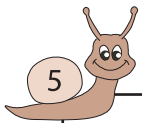
Circle the 2 numbers wh

543 217



bers whose difference is 667

33 829 308

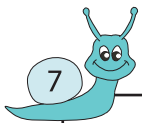


Circle the 2 numbers wh

775 57

bers whose difference is 186

53 253 267



Circle the 2 numbers wh

163 423 159 136


bers whose difference is 409

490 583 81 179



Circle the 2 numbers whose difference is 923

65 981 988 985



Circle the 2 numbers whose difference is 236

386 159 395 183

PREVIEW

Gain complete access to the largest
collection of worksheets in all subjects!

Members, please
log in to
download this
worksheet.

Not a member?
Please sign up to
gain complete
access.

www.mathworksheets4kids.com