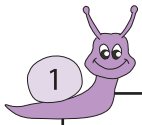


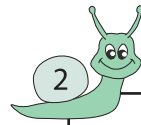
Subtraction

Sheet 3



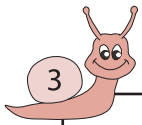
Circle the 2 numbers whose difference is 264

491 233 487 227



Circle the 2 numbers whose difference is 625

321 718 93 307



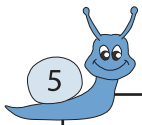
Circle the 2 numbers whose difference is 154

216 945



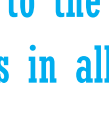
Circle the 2 numbers whose difference is 154

34 67 221




Circle the 2 numbers whose difference is 390

85 624



Circle the 2 numbers whose difference is 390

55 645 285



Circle the 2 numbers whose difference is 915

386 369 233 222 75 64 76 991



Circle the 2 numbers whose difference is 915



Circle the 2 numbers whose difference is 813

962 154 967 959



Circle the 2 numbers whose difference is 441

639 209 198 610

PREVIEW

Gain complete access to the largest
collection of worksheets in all subjects!

Members, please
log in to
download this
worksheet.

Not a member?
Please sign up to
gain complete
access.

www.mathworksheets4kids.com