


Name : _____

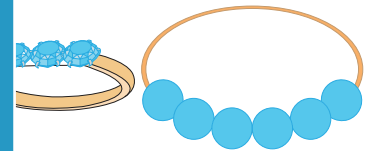
Three-Digit Addition

Sheet 2

- 1) Ruben has a 128-GB memory card, in which he has stored his office files. He buys a 164-GB memory card to meet a new requirement. How much space in all does he have now?



- 2) Mia bought a gold ring for \$595 and a matching bracelet for \$195. How much did she spend in total on her purchase of jewelry?




- 3) Gabriel has 855 baseball cards in his collection. How many cards does he have in all?

Gain complete access to the largest collection of worksheets in all subjects!


Members, please log in to download this worksheet.

Not a member? Please sign up to gain complete access.



- 4) Patricia bought a stationary bike for \$925 on the first day and 925 dollars more on the second day. How much did she spend in total over the two days?

www.mathworksheets4kids.com



- 5) A reptile park houses 210 varieties of lizards and 140 varieties of snakes. How many varieties in all does the reptile park shelter?

