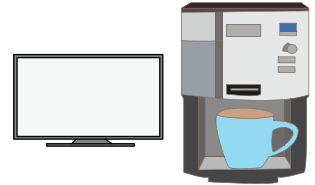


Name : _____

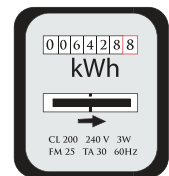
Three-Digit Addition

Sheet 3

- 1) At a clearance sale, Juanita saved \$270 when she purchased an LED TV. She went on to save \$100 when she bought a coffee maker. How much money did Juanita save altogether?



- 2) Jacob owns a two-story house. In April, the consumption of electricity was 500 units. The electricity meter recorded 650 units in May. How much electricity was consumed in all?



- 3) Franklin made a
What is his total


Gain complete access to the largest
collection of worksheets in all subjects!

Members, please
log in to
download this
worksheet.

Not a member?
Please sign up to
gain complete
access.

www.mathworksheets4kids.com

and credit-card dues.



- 4) Craig is an avid collector of
different denominations of coins
accumulated?

96 American coins of
all has Craig



- 5) A Willy Wonka vending machine is stocked with 100 Gobstopper candies and 115 Nerds candies. How many goodies does the vending machine contain altogether?