



Drawing Shapes


 = 1 square unit

Draw any shape in each grid with the following area.


1) Area = 18 square units



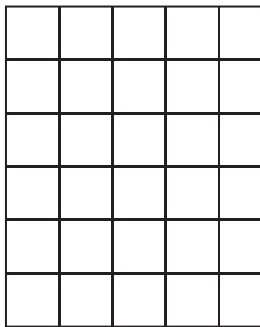
2) Area = 26 square units



3) Area = 17 square units



4) Area = 12 square units



5) Area = 20 square units

PREVIEW

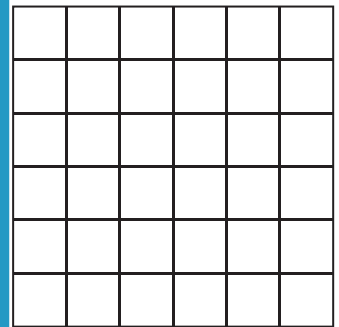
Gain complete access to the largest collection of worksheets in all subjects!

Members, please log in to download this worksheet.


Not a member? Please sign up to gain complete access.

www.mathworksheets4kids.com

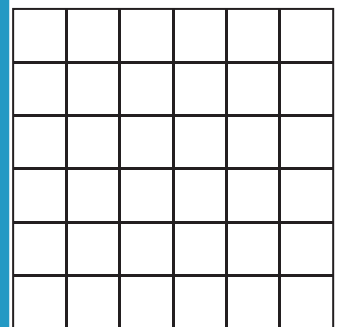
6) Area = 22 square units



7) Area = 19 square units




8) Area = 15 square units




Draw 3 different shapes with the area of 10 square units.

10)



11)



12)

