


Name : \_\_\_\_\_

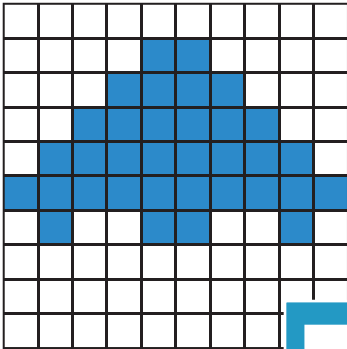
L1S3

# Counting Squares

Find the area of each shape.


 = 1 square unit

1)




Area =  square

2)

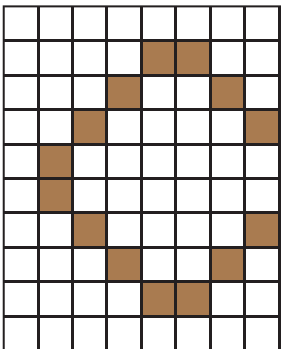


3)



Area =  square units

4)



Area =  square


**PREVIEW**

Gain complete access to the largest collection of worksheets in all subjects!

Members, please log in to download this worksheet.

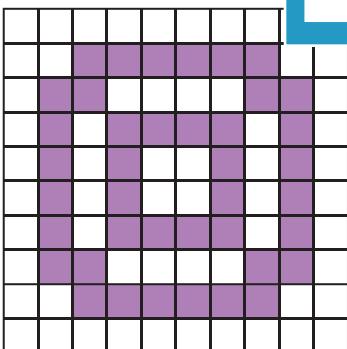
Not a member? Please sign up to gain complete access.

[www.mathworksheets4kids.com](http://www.mathworksheets4kids.com)




Area =  square units


7)



Area =  square units




Area =  square units



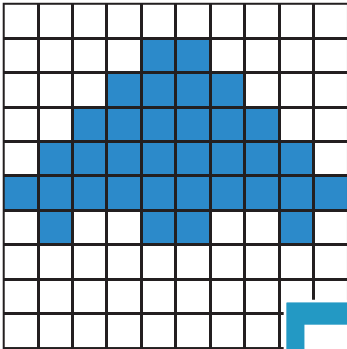
Area =  square units

# Counting Squares

Find the area of each shape.


 = 1 square unit

1)




Area = **34** square units

2)

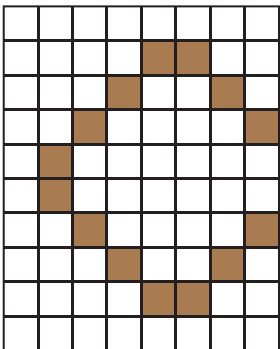


3)



Area = **44** square units

4)




Area = **16** square units

Gain complete access to the largest collection of worksheets in all subjects!

Members, please log in to download this worksheet.

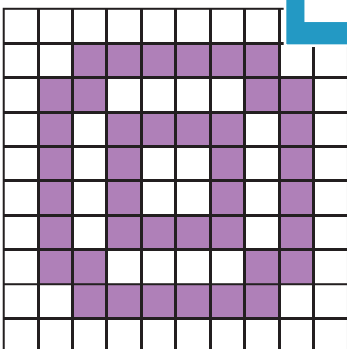
Not a member? Please sign up to gain complete access.

[www.mathworksheets4kids.com](http://www.mathworksheets4kids.com)




Area = **37** square units


7)



Area = **40** square units



Area = **38** square units



Area = **29** square units