


Name : _____


L1S5

Counting Squares

Find the area of each shape.

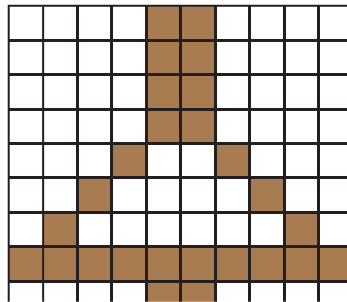
 = 1 square unit

1)




Area = square units

2)




Area = square units

3)



Area = square units

4)



Area = square units


PREVIEW

Gain complete access to the largest collection of worksheets in all subjects!

Members, please log in to download this worksheet.

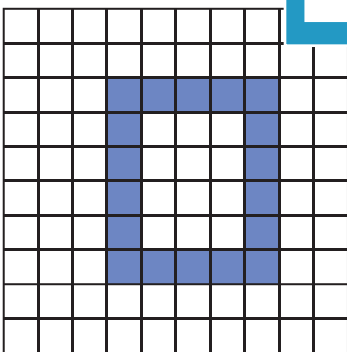
Not a member? Please sign up to gain complete access.

www.mathworksheets4kids.com




Area = square units

5)




Area = square units

6)



Area = square units


7)




Area = square units

Counting Squares

Find the area of each shape.

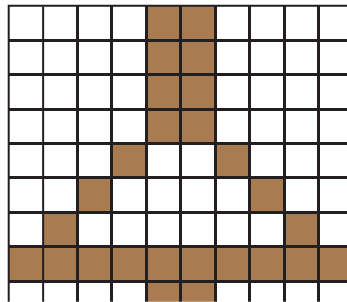
 = 1 square unit

1)



Area = **34** square units

2)



PREVIEW


Gain complete access to the largest collection of worksheets in all subjects!

Members, please log in to download this worksheet.

Not a member? Please sign up to gain complete access.


www.mathworksheets4kids.com

3)




Area = **18** square units

4)

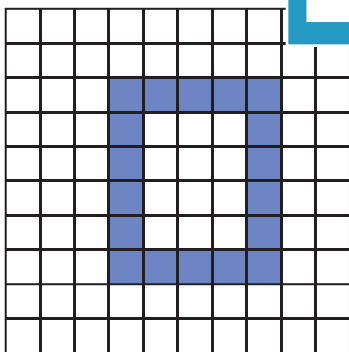


Area = **32** square units




Area = **22** square units


7)



Area = **18** square units



Area = **28** square units



Area = **30** square units