

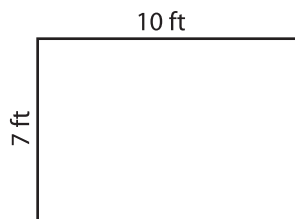
Name : \_\_\_\_\_

# Area of a Rectangle

T1L1S2

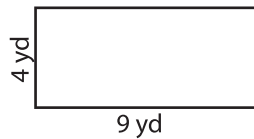
Find the area of each rectangle.

1)



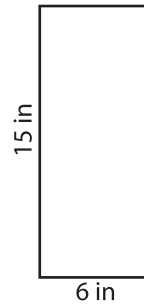
Area =

2)

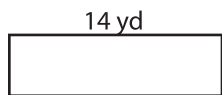


Area =

3)



4)



Area =

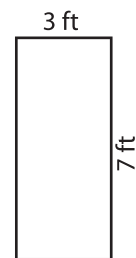
**PREVIEW**

Gain complete access to the largest collection of worksheets in all subjects!

Members, please log in to download this worksheet.

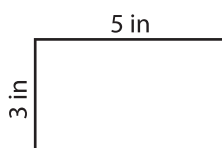
Not a member? Please sign up to gain complete access.

[www.mathworksheets4kids.com](http://www.mathworksheets4kids.com)

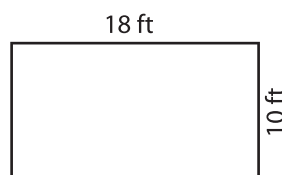


Area =

7)



Area =



Area =



Area =