

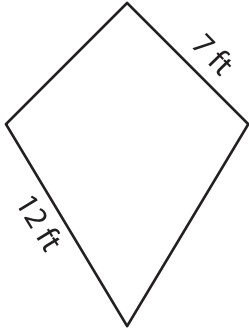
Name : \_\_\_\_\_

## Perimeter of a Kite

L1S1

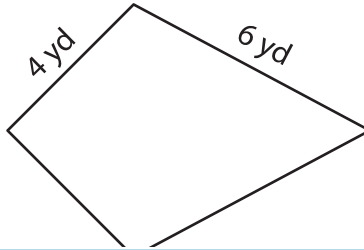
Find the perimeter of each kite.

1)

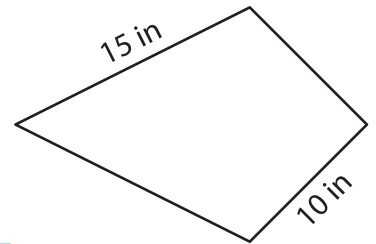


Perimeter = \_\_\_\_\_

2)

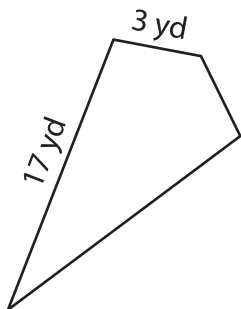


3)



Perimeter = \_\_\_\_\_

4)

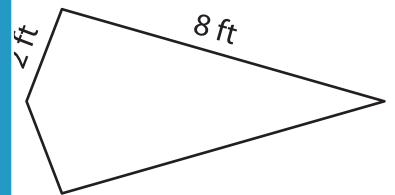


Perimeter = \_\_\_\_\_

**PREVIEW**  
Gain complete access to the largest collection of worksheets in all subjects!

Members, please log in to download this worksheet.

Not a member? Please sign up to gain complete access.



Perimeter = \_\_\_\_\_

7) If the non-congruent sides of a kite are 10 cm and 15 cm, find its perimeter.

[www.mathworksheets4kids.com](http://www.mathworksheets4kids.com)

Perimeter of the kite?

\_\_\_\_\_

8) One of the sides of a kite measures 13 inches. If the other side of the kite measures 20 inches, find its perimeter.

\_\_\_\_\_