

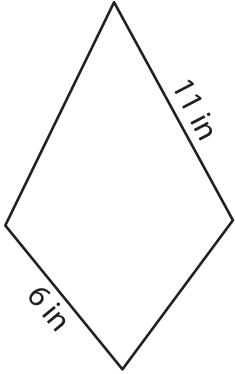
Name : _____

Perimeter of a Kite

L1S4

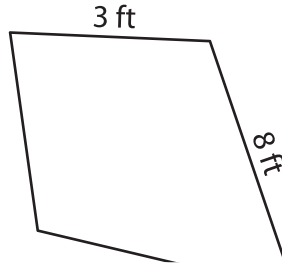
Find the perimeter of each kite.

1)

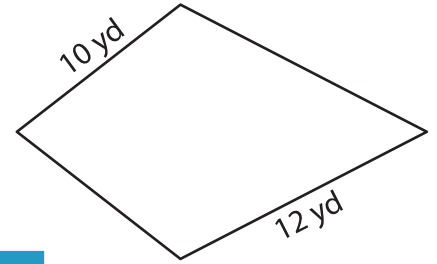


Perimeter = _____

2)

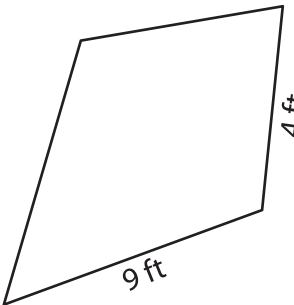


3)



Perimeter = _____

4)



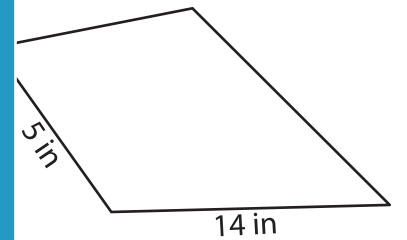
Perimeter = _____

PREVIEW
Gain complete access to the largest collection of worksheets in all subjects!

Members, please log in to download this worksheet.

Not a member? Please sign up to gain complete access.

www.mathworksheets4kids.com



Perimeter = _____

7) What is the perimeter of _____

_____ feet?

8) If the non-congruent sides of a kite measure 11 inches and 20 inches, what is the perimeter of the kite?
