

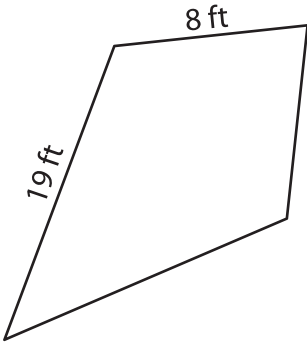
Name : \_\_\_\_\_

## Perimeter of a Kite

L1S5

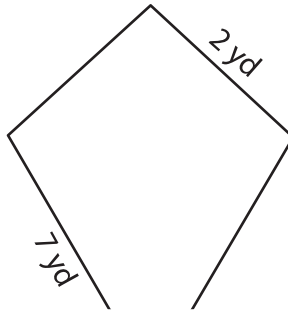
Find the perimeter of each kite.

1)

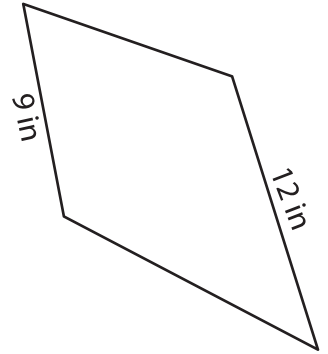


Perimeter = \_\_\_\_\_

2)

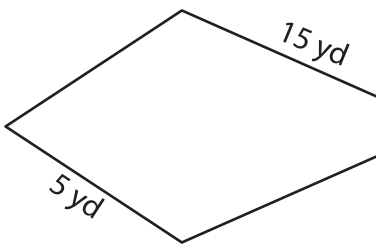


3)



Perimeter = \_\_\_\_\_

4)



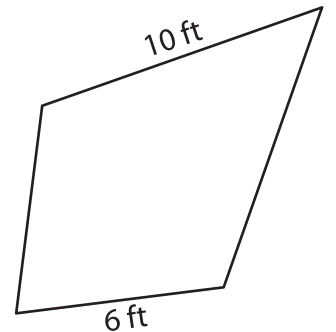
Perimeter = \_\_\_\_\_

Gain complete access to the largest collection of worksheets in all subjects!

Members, please log in to download this worksheet.

Not a member? Please sign up to gain complete access.

[www.mathworksheets4kids.com](http://www.mathworksheets4kids.com)



Perimeter = \_\_\_\_\_

7) The side lengths of a kite

of the kite.

\_\_\_\_\_

8) If the lengths of the sides of a kite are 10 feet and 19 feet, find its perimeter.

\_\_\_\_\_