

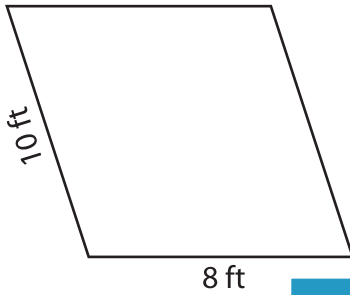
Name : _____

Perimeter of a Parallelogram

L1S2

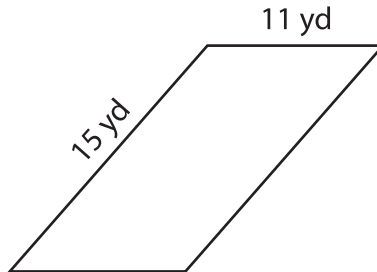
Find the perimeter of each parallelogram.

1)

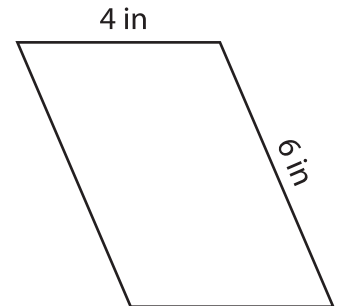


Perimeter = _____

2)

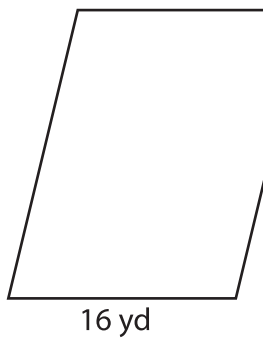


3)



Perimeter = _____

4)



Perimeter = _____



Perimeter = _____

PREVIEW

Gain complete access to the largest collection of worksheets in all subjects!

Members, please log in to download this worksheet.

Not a member? Please sign up to gain complete access.

www.mathworksheets4kids.com

7) If the lengths of the adjacent sides of the parallelogram are 12 ft and 15 ft, what is the perimeter?

8) Find the perimeter of the parallelogram, if its adjacent sides measure 20 feet and 13 feet.
