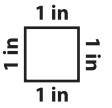


Name : _____


Perimeter

Sheet 1




Find the perimeter of each shape.

1)




Perimeter = _____

2)



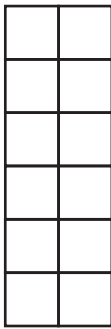
Perimeter = _____

3)



Perimeter = _____

4)



Perimeter = _____

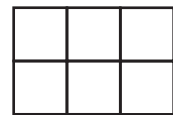
PREVIEW

Gain complete access to the largest collection of worksheets in all subjects!

Members, please log in to download this worksheet.

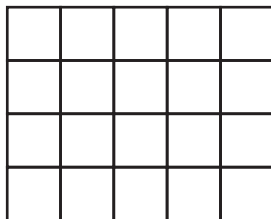
Not a member? Please sign up to gain complete access.

www.mathworksheets4kids.com

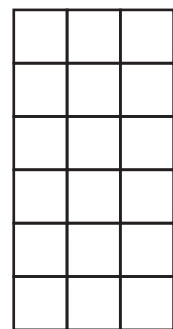


Perimeter = _____

7)




Perimeter = _____




Perimeter = _____

10)



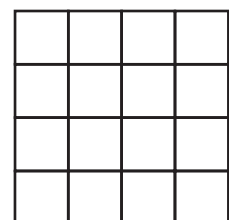
Perimeter = _____

11)



Perimeter = _____

12)



Perimeter = _____