

Name : _____

Perimeter of a Polygon

A) Find the perimeter of each regular polygon.

1) Side length = 5 ft, Number of sides = 4

Perimeter = _____

2) Side length = 11 yd, Number of sides = 3

Perimeter = _____

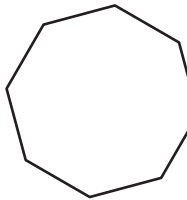
3) Side length = 9 in, Number of sides = 7

Perimeter = _____

4) Side length = 16 yd, Number of sides = 5

Perimeter = _____

5)



Perimeter = _____

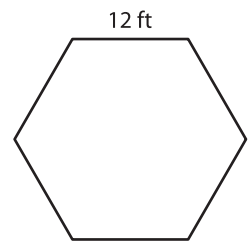
PREVIEW

Gain complete access to the largest collection of worksheets in all subjects!

Members, please log in to download this worksheet.

Not a member? Please sign up to gain complete access.

www.mathworksheets4kids.com



Perimeter = _____

B) Find the perimeter

8) 8 in, 13 in, 18 in, 2

Perimeter = _____

10) 6 ft, 12 ft, 19 ft

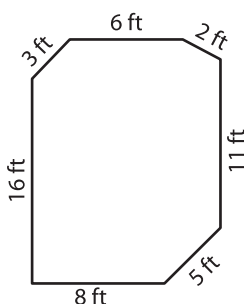
Perimeter = _____

the lengths.

t, 2 ft, 1 ft

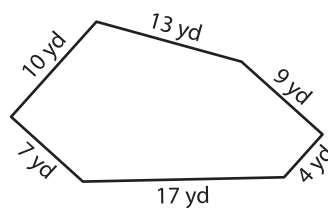
17 yd, 19 yd, 15 yd, 14 yd

12)



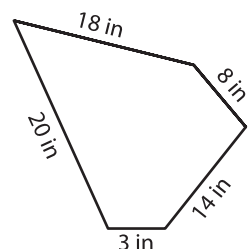
Perimeter = _____

13)



Perimeter = _____

14)



Perimeter = _____