

Name : _____

Perimeter of a Polygon

A) Find the perimeter of each regular polygon.

1) Side length = 8 yd, Number of sides = 3

Perimeter = _____

2) Side length = 6 in, Number of sides = 5

Perimeter = _____

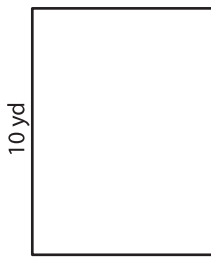
3) Side length = 14 ft, Number of sides = 8

Perimeter = _____

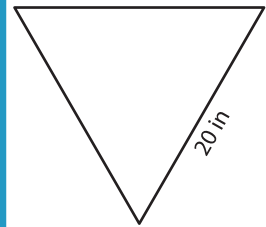
4) Side length = 3 ft, Number of sides = 6

Perimeter = _____

5)



Perimeter = _____



Perimeter = _____

PREVIEW

Gain complete access to the largest collection of worksheets in all subjects!

Members, please log in to download this worksheet.

Not a member? Please sign up to gain complete access.

www.mathworksheets4kids.com

B) Find the perimeter

8) 17 yd, 10 yd, 5 yd

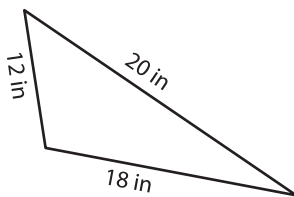
Perimeter = _____

lengths.

10) 11 in, 14 in, 6 in, 1

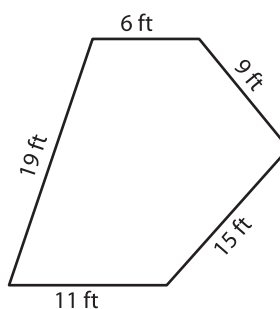
Perimeter = _____

12)



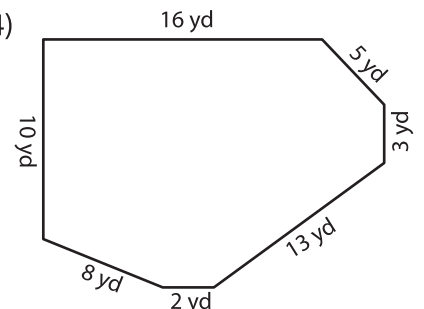
Perimeter = _____

13)



Perimeter = _____

14)



Perimeter = _____