

Name : _____

L1S4

Perimeter of a Polygon

A) Find the perimeter of each regular polygon.

1) Side length = 13 in, Number of sides = 5

Perimeter = _____

2) Side length = 2 yd, Number of sides = 3

Perimeter = _____

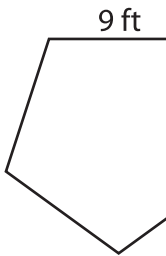
3) Side length = 7 yd, Number of sides = 4

Perimeter = _____


4) Side length = 18 ft, Number of sides = 6

Perimeter = _____

5)



Perimeter = _____



19 yd

Perimeter = _____

PREVIEW

Gain complete access to the largest collection of worksheets in all subjects!

Members, please log in to download this worksheet.

Not a member? Please sign up to gain complete access.

www.mathworksheets4kids.com

B) Find the perimeter

8) 14 yd, 20 yd, 9 yd,

Perimeter = _____

lengths.

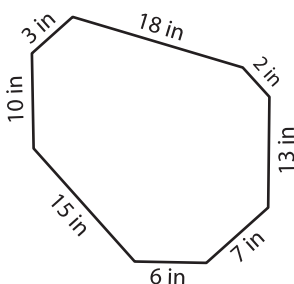
ft, 14 ft, 8 ft, 3 ft

10) 10 in, 11 in, 8 in, 1

Perimeter = _____

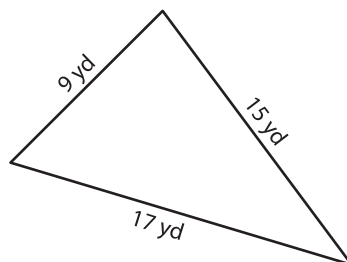
3 yd, 17 yd

12)



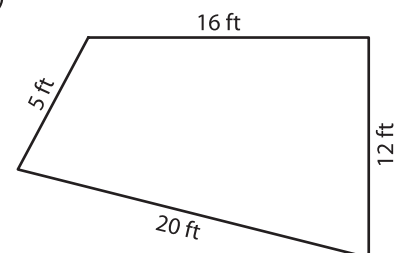
Perimeter = _____

13)



Perimeter = _____

14)



Perimeter = _____