

Name : _____

Perimeter of a Polygon

A) Find the perimeter of each regular polygon.

1) Side length = 9 ft, Number of sides = 8

Perimeter = _____

2) Side length = 17 in, Number of sides = 6

Perimeter = _____

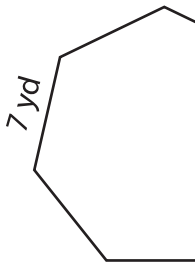
3) Side length = 14 in, Number of sides = 4

Perimeter = _____

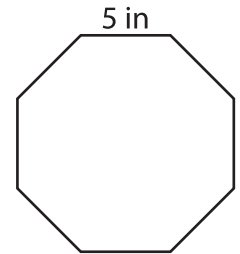
4) Side length = 20 yd, Number of sides = 3

Perimeter = _____

5)



Perimeter = _____



Perimeter = _____

PREVIEW

Gain complete access to the largest collection of worksheets in all subjects!

Members, please log in to download this worksheet.

Not a member? Please sign up to gain complete access.

www.mathworksheets4kids.com

B) Find the perimeter

8) 19 in, 6 in, 20 in

Perimeter = _____

the lengths.

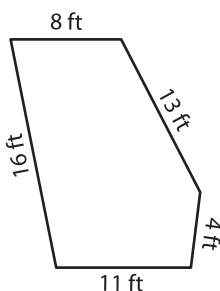
17 ft

10) 5 yd, 3 yd, 8 yd, 13 yd

Perimeter = _____

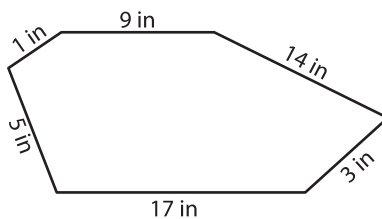
17 ft, 9 ft, 6 ft, 18 ft, 14 ft

12)



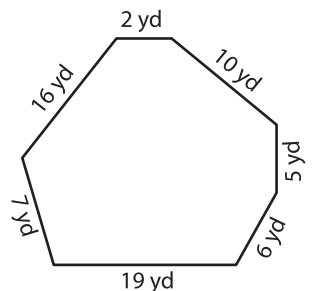
Perimeter = _____

13)



Perimeter = _____

14)



Perimeter = _____