

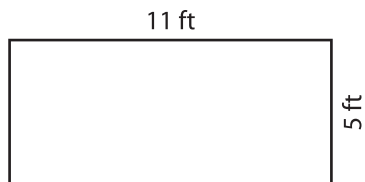
Name : _____

Perimeter of a Rectangle

T1L1S2

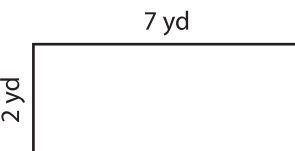
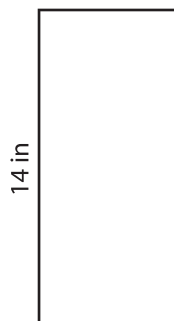
Find the perimeter of each rectangle.

1)



Perimeter =

2)



Perimeter =

4)




Perimeter =

PREVIEW
Gain complete access to the largest collection of worksheets in all subjects!

Members, please log in to download this worksheet.

Not a member? Please sign up to gain complete access.

www.mathworksheets4kids.com

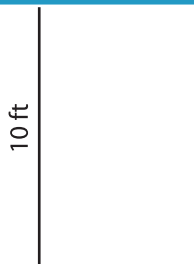


Perimeter =

7)



Perimeter =



Perimeter =



Perimeter =