

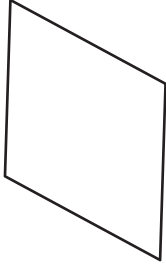
Name : \_\_\_\_\_

## Perimeter of a Rhombus

Sheet 2

Find the side length each rhombus.

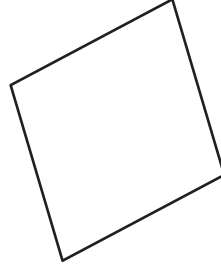
1)



Perimeter = 108 ft

side length = \_\_\_\_\_

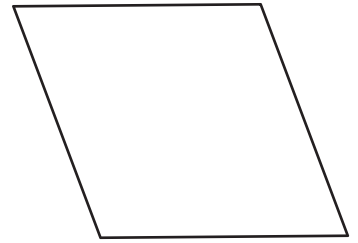
2)



Perimeter = 136 in

side length = \_\_\_\_\_

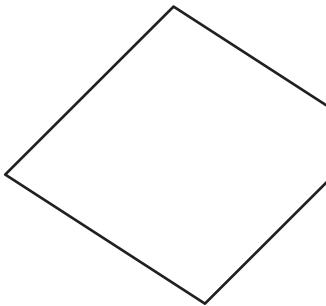
3)



Perimeter = 124 ft

side length = \_\_\_\_\_

4)



Perimeter = 116 yd

side length = \_\_\_\_\_

7) What is the side length

\_\_\_\_\_

8) The perimeter of a rhombus is 76 feet. Calculate the side length of the rhombus.

\_\_\_\_\_

# PREVIEW

Gain complete access to the largest collection of worksheets in all subjects!

Members, please log in to download this worksheet.

Not a member? Please sign up to gain complete access.

[www.mathworksheets4kids.com](http://www.mathworksheets4kids.com)