

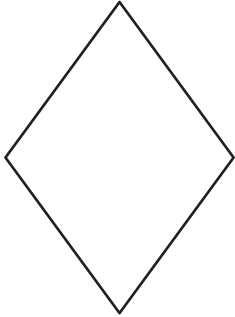
Name : _____

Perimeter of a Rhombus

Sheet 4

Find the side length each rhombus.

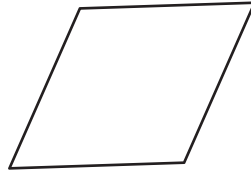
1)



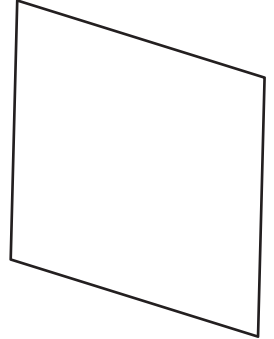
Perimeter = 52 in

side length = _____

2)



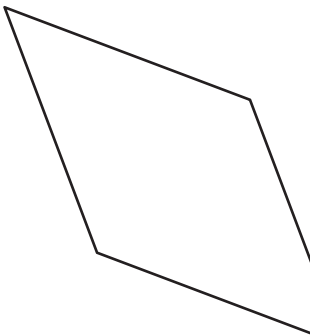
3)



Perimeter = 200 ft

side length = _____

4)



Perimeter = 176 yd

side length = _____

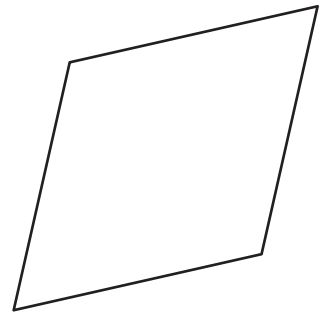
PREVIEW

Gain complete access to the largest collection of worksheets in all subjects!

Members, please log in to download this worksheet.

Not a member? Please sign up to gain complete access.

www.mathworksheets4kids.com



Perimeter = 68 in

side length = _____

7) Find the side length of t

8) If the perimeter of a rhombus is 20 inches, determine the side length of the rhombus.
