

Name : _____

T1L1S2

Area of a Square

Find the area of each square.


1)



4 ft

Area =

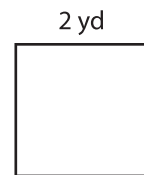
2)



10 in


Area =

3)



2 yd

4)



7 in

Area =

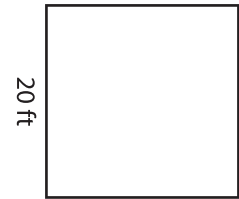
PREVIEW
Gain complete access to the largest collection of worksheets in all subjects!

Members, please log in to download this worksheet.

Not a member? Please sign up to gain complete access.


www.mathworksheets4kids.com

Area =



20 ft

7)



19 ft

Area =



15 in

Area =



3 yd

Area =