


Name : _____

Perimeter of a Square

Example :



$$\begin{aligned} \text{Perimeter} &= 16 \text{ ft} \\ \text{Perimeter} &= 4 \times \text{Side} \\ 16 \text{ ft} &= 4 \times \text{Side} \\ \frac{16}{4} &= \text{Side} \\ \text{Side} &= \mathbf{4 \text{ ft}} \end{aligned}$$

Ans = 4 ft

Find the side length of each square.

1)



Perimeter = 80 in

Side length =

2)



3)



Perimeter = 100 yd


length =

4)



Perimeter = 92 yd


Side length =



Perimeter = 12 ft

length =

7)



Perimeter = 40 ft

Side length =



Perimeter = 84 in

Side length =



Perimeter = 48 yd

Side length =

PREVIEW

Gain complete access to the largest collection of worksheets in all subjects!

Members, please log in to download this worksheet.

Not a member? Please sign up to gain complete access.

www.mathworksheets4kids.com