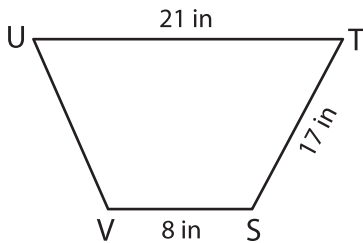


Name : _____

Perimeter of a Trapezoid

Find the missing side length of each trapezoid.

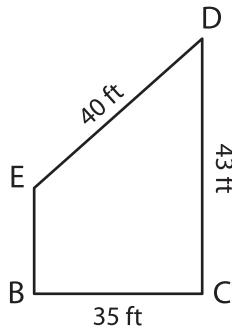
1)



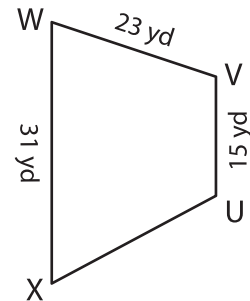
Perimeter = 63 in

UV = _____

2)



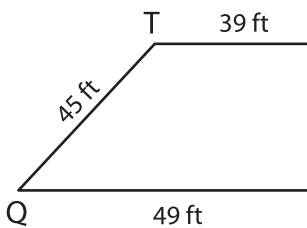
3)



Perimeter = 94 yd

XU = _____

4)



Perimeter = 155 ft

RS = _____

7) The legs of a trapezoid n
Determine the other bas

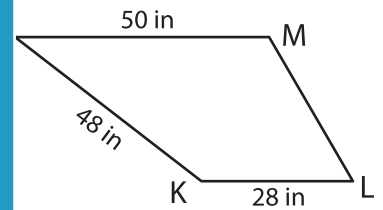
PREVIEW

Gain complete access to the largest collection of worksheets in all subjects!

Members, please log in to download this worksheet.

Not a member? Please sign up to gain complete access.

www.mathworksheets4kids.com



Perimeter = 166 in

LM = _____

bases measures 26 inches.

8) The perimeter of a trapezoid is 55 yards. If the side lengths of the trapezoid are 13 yards, 12 yards and 18 yards, find the missing side length.