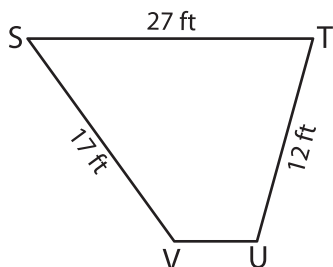


Perimeter of a Trapezoid

Find the missing side length of each trapezoid.

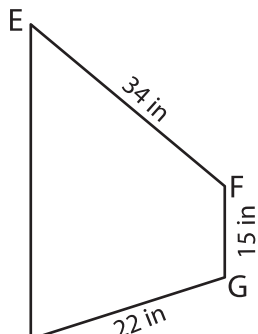
1)



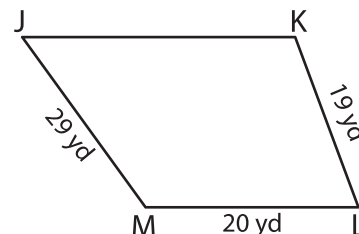
Perimeter = 64 ft

UV = _____

2)



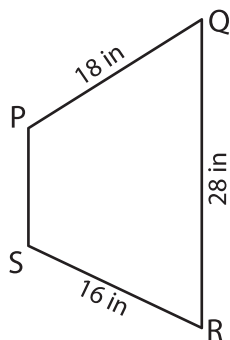
3)



Perimeter = 106 yd

JK = _____

4)



Perimeter = 74 in

PS = _____

7) The perimeter of a trapezoid is 42 inches, find the missing side length.

8) The legs of a trapezoid measure 26 yards and 30 yards. One of the parallel bases measures 14 yards. Determine the other base, if the perimeter of the trapezoid is 94 yards.

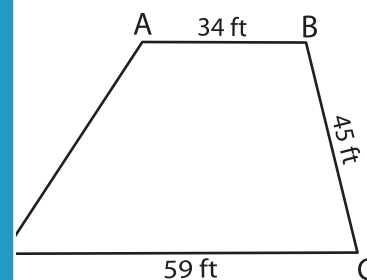
PREVIEW

Gain complete access to the largest collection of worksheets in all subjects!

Members, please log in to download this worksheet.

Not a member? Please sign up to gain complete access.

www.mathworksheets4kids.com



Perimeter = 187 ft

AD = _____

The other two sides are 8 inches, 36 inches and _____