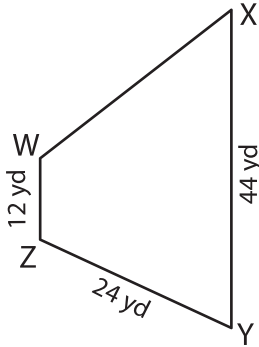


Name : _____

Perimeter of a Trapezoid

Find the missing side length of each trapezoid.

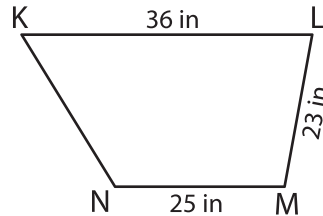
1)



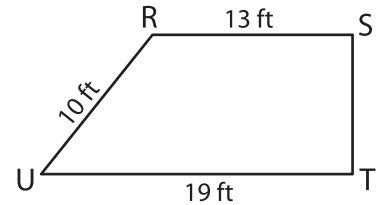
Perimeter = 113 yd

WX = _____

2)



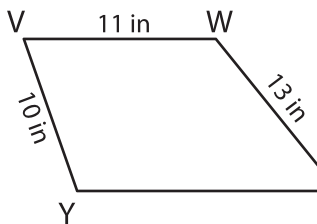
3)



Perimeter = 50 ft

ST = _____

4)



Perimeter = 52 in

XY = _____

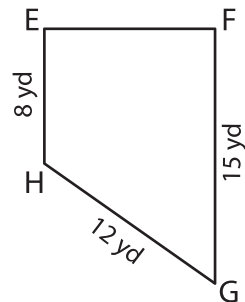
PREVIEW

Gain complete access to the largest collection of worksheets in all subjects!

Members, please log in to download this worksheet.

Not a member? Please sign up to gain complete access.

www.mathworksheets4kids.com



Perimeter = 44 yd

EF = _____

7) The legs of a trapezoid measure 10 feet and 12 feet. The top base measures 8 feet. Determine the other base.

The bottom base measures 2 yards.

8) The perimeter of a trapezoid is 95 feet. If each leg of the trapezoid measures 19 feet and one of the parallel bases is 28 feet, find its other base.
