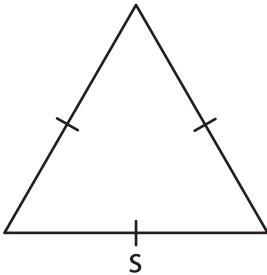


**Missing Side**

Find the missing side.

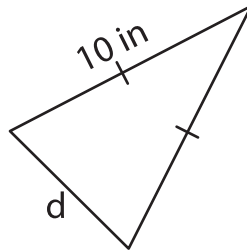
1)



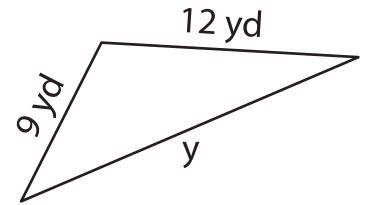
Perimeter = 33 ft

s = \_\_\_\_\_

2)



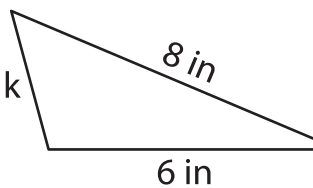
3)



Perimeter = 36 yd

y = \_\_\_\_\_

4)



Perimeter = 17 in

k = \_\_\_\_\_

7) The perimeter of a triangle is 14 yards and 17 yards, find the length of the missing side.

\_\_\_\_\_

8) If the perimeter of an equilateral triangle is 24 feet, determine the length of each side.

\_\_\_\_\_

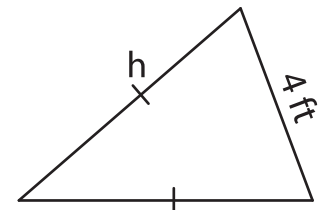
**PREVIEW**

Gain complete access to the largest collection of worksheets in all subjects!

Members, please log in to download this worksheet.

Not a member? Please sign up to gain complete access.

[www.mathworksheets4kids.com](http://www.mathworksheets4kids.com)



Perimeter = 16 ft

h = \_\_\_\_\_

are 14 yards and 17 yards,